

BCM School

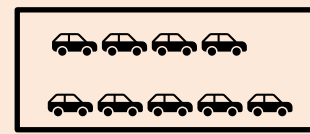
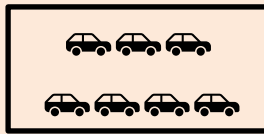
A Senior Secondary School of BCM Foundation

Affiliated to CBSE New Delhi Sec-32A Chd Road Ldh

CLASS – 1 SUBJECT – MATHEMATICS SESSION – 2024-25

WORKSHEET – III

1. Count and write the missing numbers.



2 cars and 7 cars is equal to cars

2. Write number names –

- a 134 _____
- b 159 _____
- c 170 _____
- d 141 _____
- e 168 _____

3. Fill in the blanks

- a) $8 + 5 =$ _____
- b) $9 + 1 =$ _____
- c) $5 + 0 =$ _____
- d) $6 + 6 =$ _____
- e) $9 - 9 =$ _____
- f) $8 - 2 =$ _____
- g) $4 - 1 =$ _____
- h) $7 - 0 =$ _____

4. Arrange in Ascending order

- a) 37, 98, 15, 65
Sol. _____
- b) 84, 20, 100, 61
Sol. _____



5. Count and subtract

- a) - =
- b) - =



6. Write numeral for the following

- a) One hundred forty _____
- b) One hundred sixty seven _____
- c) One hundred thirty two _____
- d) One hundred fifty nine _____
- e) One hundred sixty one _____

7. Add the following

2	5	12	7
0	1	<u>+ 07</u>	<u>+ 9</u>
<u>+ 4</u>	<u>+ 2</u>	_____	_____
_____	_____		

8. Arrange in Descending order

- a) 67, 91, 24, 42

Sol. _____

- b) 10, 72, 85, 36

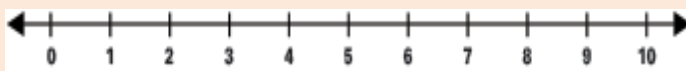
Sol. _____



9. Subtract the following

7	16	18	8
- 4	- 05	- 12	- 6
_____	_____	_____	_____
_____	_____	_____	_____

10. Addition on the number line



6 + 3 = _____

11. Colour the correct number

- a) Nineteen

19

- b) twenty six

62

26

- c) fifty

50

15