

**BCM SCHOOL, CHANDIGARH ROAD, LUDHIANA.**

**A Senior Secondary School of BCM Foundation**

**Affiliated to CBSE New Delhi.**

**CLASS – 1**

**Worksheet – IV**

**Session – 2024-25**

**SUBJECT – MATHEMATICS**

**1. Solve the following -**

$$\begin{array}{r} 12 \\ + 36 \\ \hline \end{array}$$

$$\begin{array}{r} 45 \\ - 23 \\ \hline \end{array}$$

$$\begin{array}{r} 15 \\ + 22 \\ \hline \end{array}$$

$$\begin{array}{r} 96 \\ - 36 \\ \hline \end{array}$$

$$\begin{array}{r} 63 \\ + 10 \\ \hline \end{array}$$

$$\begin{array}{r} 83 \\ - 22 \\ \hline \end{array}$$

**2. Write in Expanded form -**

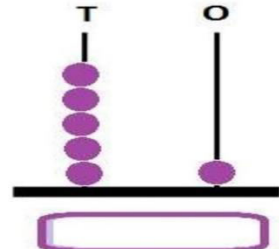
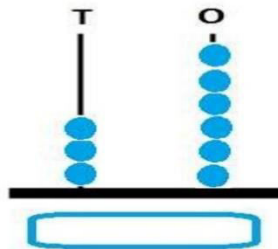
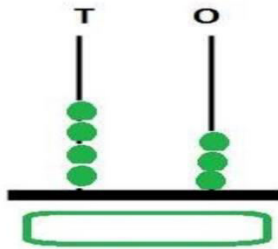
a)  $52 = \underline{\quad\quad}$  tens +  $\underline{\quad\quad}$  ones

b)  $71 = \underline{\quad\quad}$  tens +  $\underline{\quad\quad}$  ones

c)  $80 = \underline{\quad\quad}$  tens +  $\underline{\quad\quad}$  ones

d)  $36 = \underline{\quad\quad}$  tens +  $\underline{\quad\quad}$  ones

**3. See the abacus and write the correct number.**



**4. Skip Counting -**

a) By 5's

10, 15, 20,     ,     ,      .

b) By 2's

18, 20, 22,     ,     ,      .

c) By 10's

50, 60, 70,     ,     ,      .

**5. Statement Sums -**

**Q1. There are 25 big fish and 33 small fish in a pond. How many fish are there in all ?**

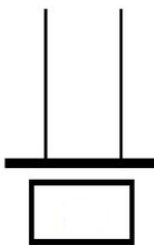
**Sol.** \_\_\_\_\_  
\_\_\_\_\_  
\_\_\_\_\_  
\_\_\_\_\_

**Q2. There are 25 pages in a drawing book. Sona has coloured 11 pages. How many pages are still left to colour ?**

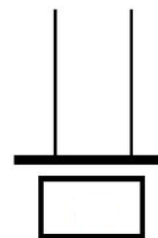
**Sol.** \_\_\_\_\_  
\_\_\_\_\_  
\_\_\_\_\_  
\_\_\_\_\_

**6. Draw the beads on the abacus for the given numbers –**

**a) 35**



**b) 14**



**7. Write number names -**

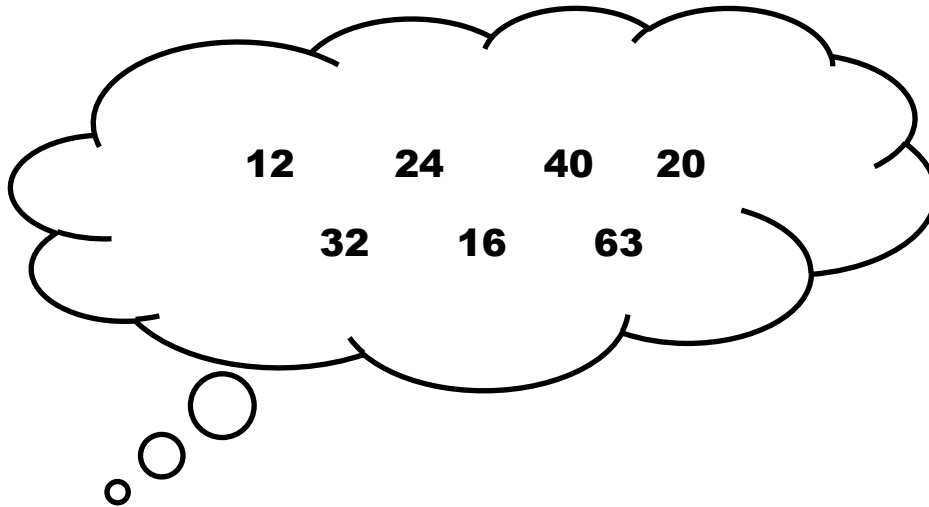
**a) 235** \_\_\_\_\_

**b) 249** \_\_\_\_\_

**c) 210** \_\_\_\_\_

**d) 221** \_\_\_\_\_

## 8. Dodging Tables –



- a)  $7 \times 9 =$  \_\_\_\_\_
- b)  $6 \times 4 =$  \_\_\_\_\_
- c)  $8 \times 5 =$  \_\_\_\_\_
- d)  $4 \times 8 =$  \_\_\_\_\_
- e)  $3 \times 4 =$  \_\_\_\_\_
- f)  $2 \times 10 =$  \_\_\_\_\_